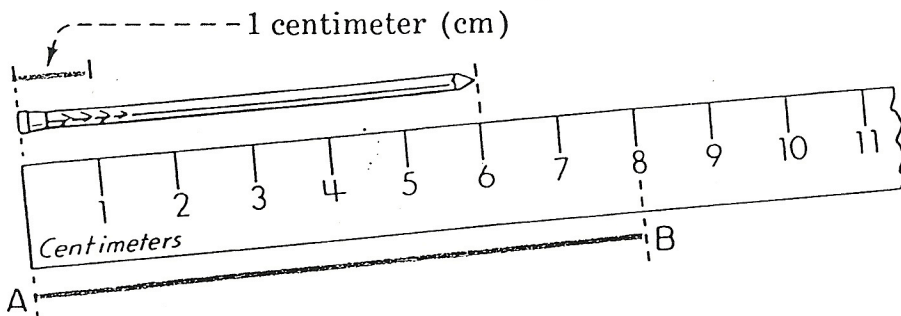



# Lesson 1 Centimeter





The nail is 6 centimeters long. Line segment AB is \_\_\_\_\_ centimeters long.

Find the length of each picture to the nearest centimeter.


1. \_\_\_\_\_ cm 

2. \_\_\_\_\_ cm 

3. \_\_\_\_\_ cm 

4. \_\_\_\_\_ cm 

5. \_\_\_\_\_ cm 

6. \_\_\_\_\_ cm 

Use a ruler to draw a line segment for each measurement.

7. 5 cm

8. 8 cm

9. 3 cm

10. 6 cm

Perfect score: 10 My score: \_\_\_\_\_